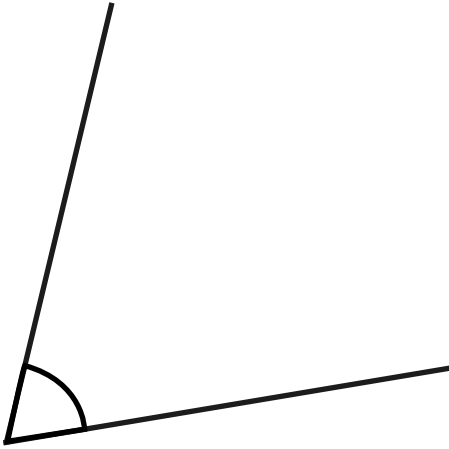


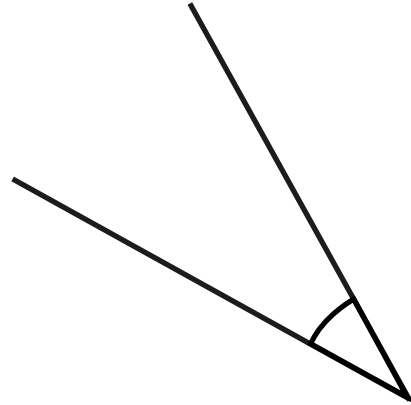
# Measure Acute Angles

Measure the following angles:

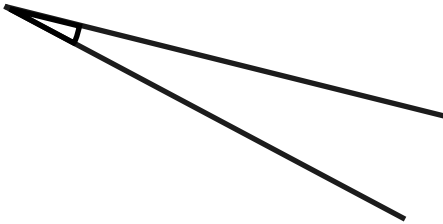
1. °




2. °



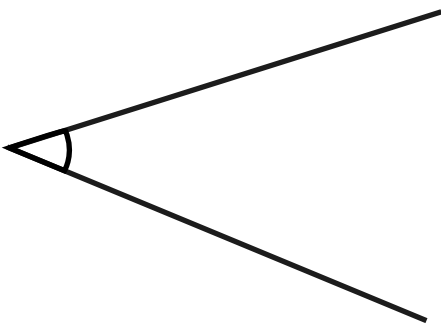
3. °




4. °



5. °



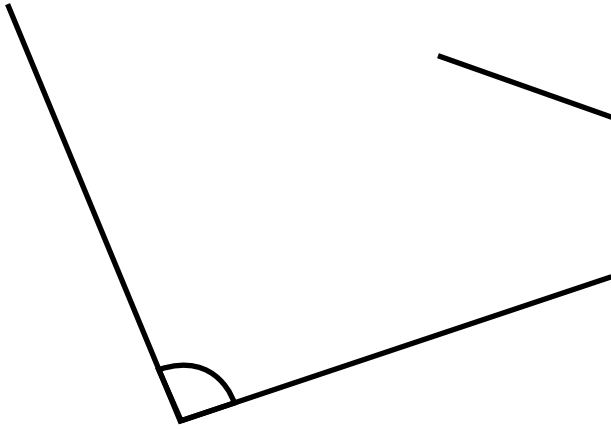
6. °



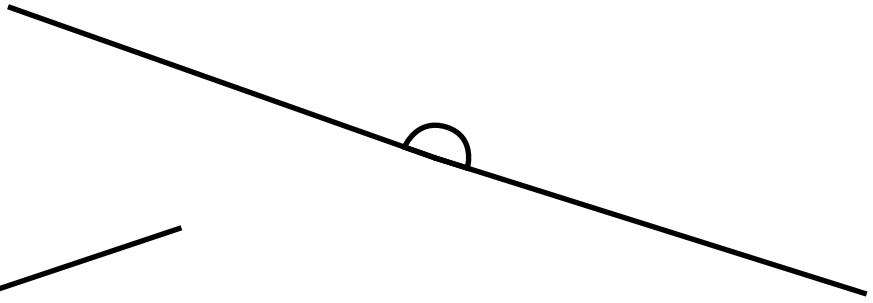
# Measure Obtuse Angles

Measure the following angles:

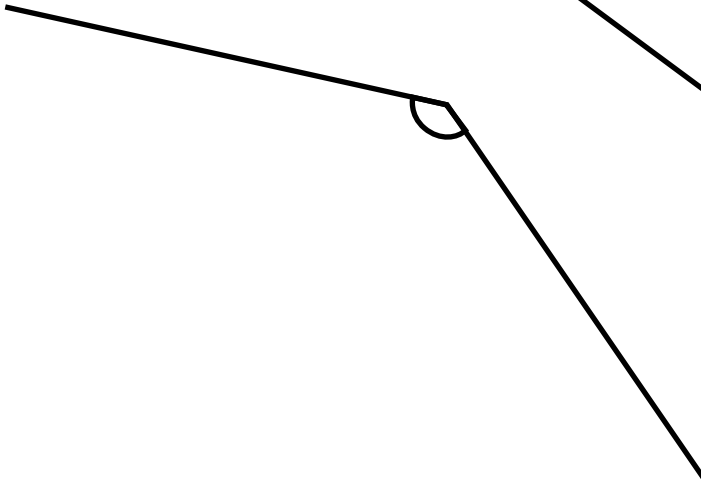
1. °




2. °



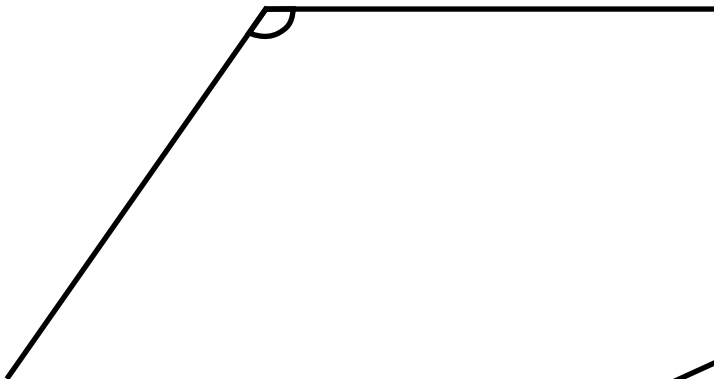
3. °



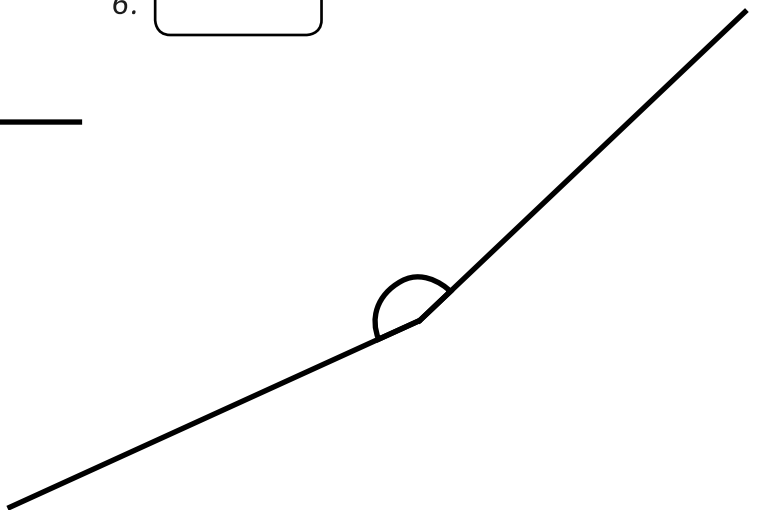
4. °



5. °



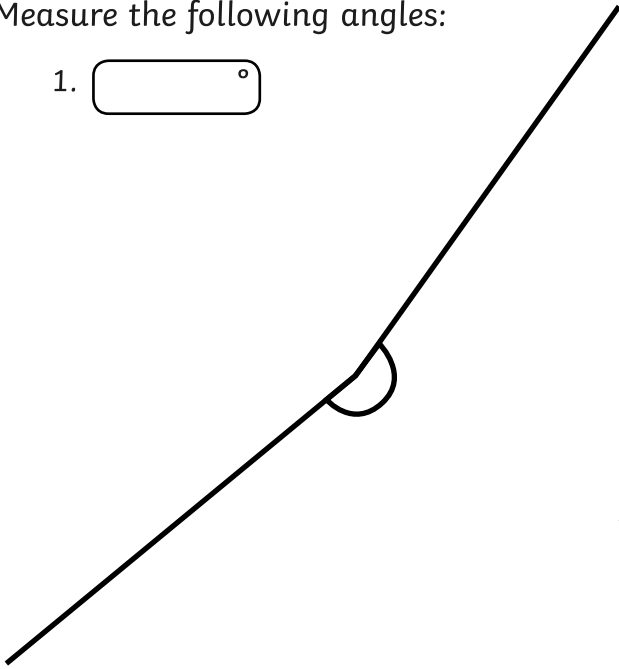
6. °



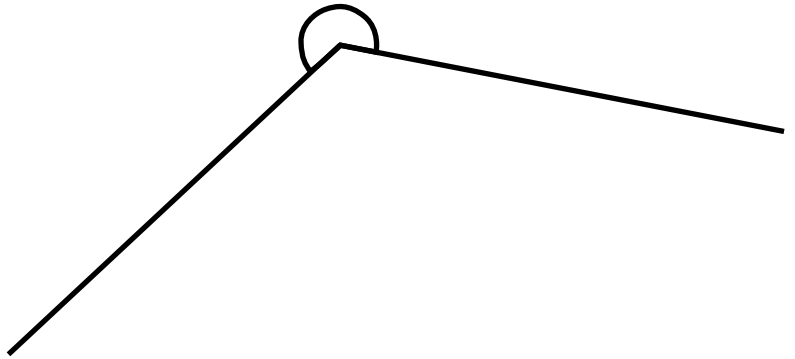
# Measure Reflex Angles

Measure the following angles:

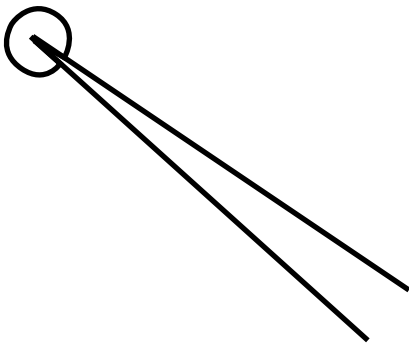
1. °



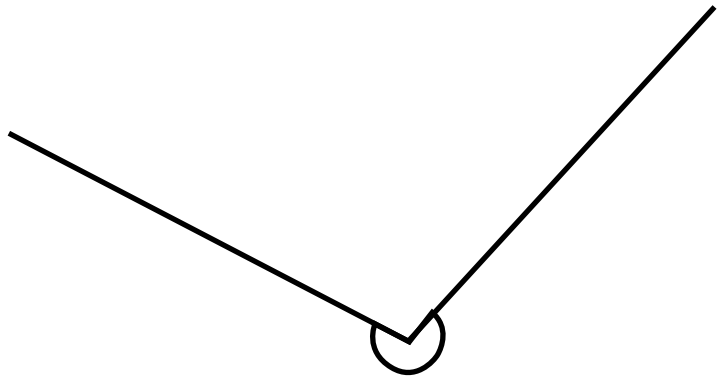
2. °



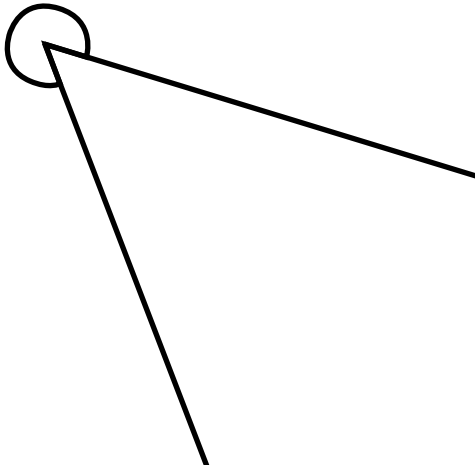
3. °



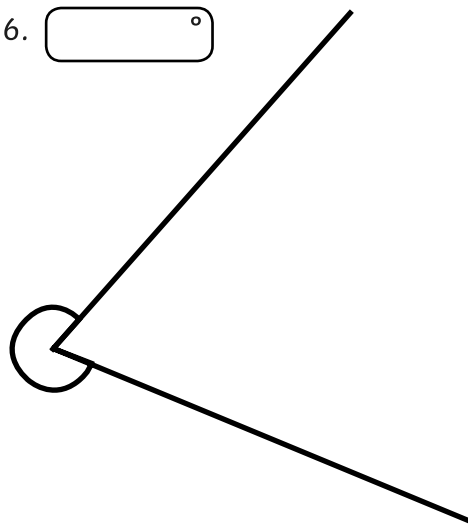
4. °



5. °



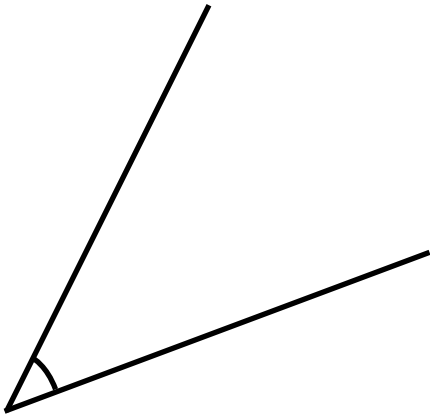
6. °



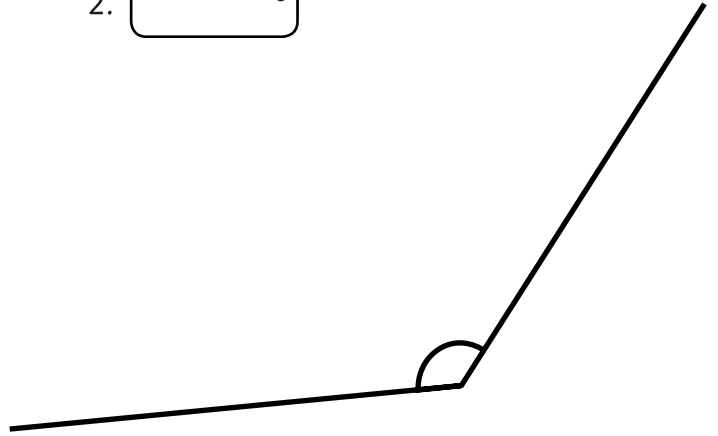
# Measure Angles

Measure the following angles:

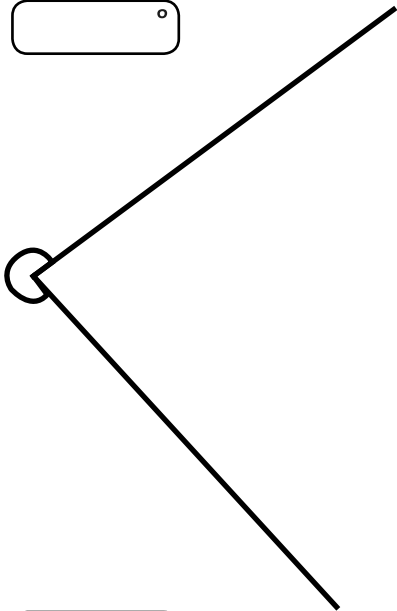
1. °



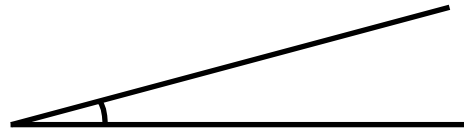
2. °



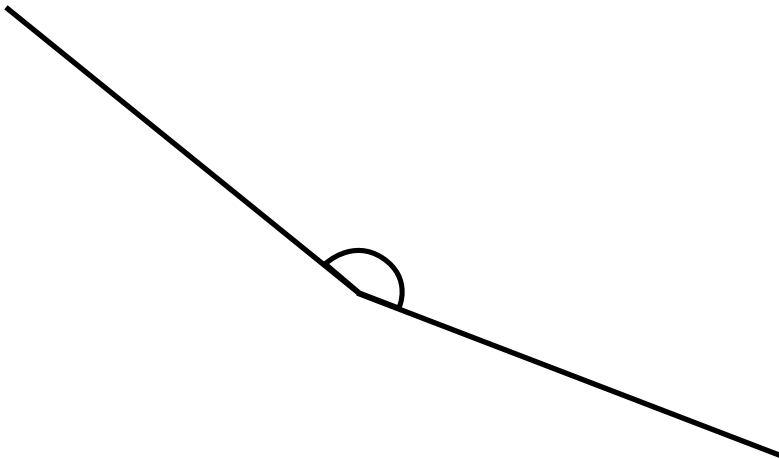
3. °



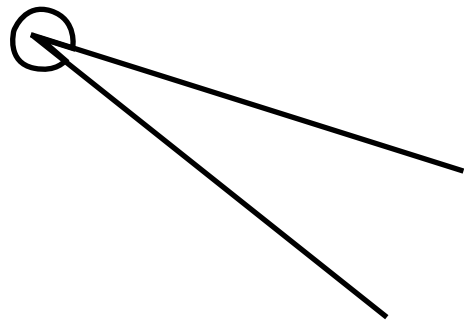
4. °



5. °



6. °



# Measure Angles - Answers

## Acute

1.  $67^\circ$
2.  $32^\circ$
3.  $14^\circ$
4.  $88^\circ$
5.  $40^\circ$
6.  $72^\circ$

## Obtuse

1.  $94^\circ$
2.  $178^\circ$
3.  $137^\circ$
4.  $153^\circ$
5.  $125^\circ$
6.  $161^\circ$

## Reflex

1.  $195^\circ$
2.  $234^\circ$
3.  $352^\circ$
4.  $255^\circ$
5.  $308^\circ$
6.  $289^\circ$

## Mixed

1.  $43^\circ$
2.  $128^\circ$
3.  $276^\circ$
4.  $15^\circ$
5.  $162^\circ$
6.  $339^\circ$

# Draw Acute Angles

Draw the following angles:

1.  $23^\circ$

2.  $42^\circ$

3.  $56^\circ$

4.  $76^\circ$

5.  $12^\circ$

6.  $84^\circ$

7.  $5^\circ$

8.  $38^\circ$

# Draw Obtuse Angles

Draw the following angles:

1.  $135^\circ$

2.  $178^\circ$

3.  $98^\circ$

4.  $112^\circ$

5.  $163^\circ$

6.  $145^\circ$

7.  $152^\circ$

8.  $107^\circ$

# Draw Reflex Angles

Draw the following angles:

1.  $213^\circ$

2.  $242^\circ$

3.  $346^\circ$

4.  $303^\circ$

5.  $190^\circ$

6.  $287^\circ$

7.  $321^\circ$

8.  $269^\circ$



# Draw Angles

Draw the following angles:

1.  $21^\circ$

2.  $142^\circ$

3.  $256^\circ$

4.  $74^\circ$

5.  $113^\circ$

6.  $184^\circ$

7.  $9^\circ$

8.  $338^\circ$