

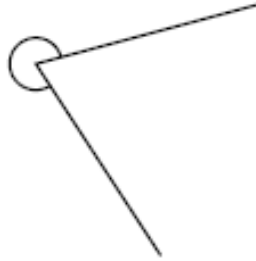
Angle worksheet

What is the name of each of the following angles?

(1)



(6)



(2)



(7)



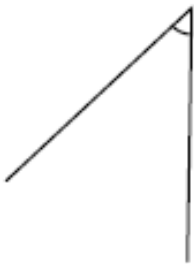
(3)



(8)



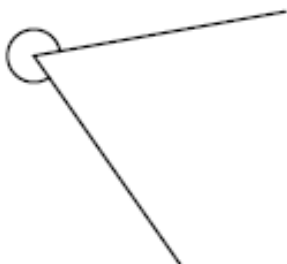
(4)



(9)



(5)



(10)

